

Second Grade Summer Packet

Dear Parents of Rising Second Graders,

Thanks be to God for a wonderful school year! We are excited to have your child enter the second grade at Queen of Apostles Catholic School for the next school year. Summer break is a wonderful time to rest and relax, but also to read and review. Attached is a summer packet that reviews some of the skills learned in first grade. The summer packet will be worth five homework grades, and graded upon submission in August. A reading log is also attached to encourage students to continue reading throughout the summer break. I ask that you please help your child choose grade-appropriate books, including short chapter books. Students are to read at least one fiction book and one non-fiction book, then complete the two book reports. Below are some recommendations on fictional chapter book series:

FICTION OPTIONS

JUNIE B. JONES by Barbara Park
AMELIA BEDELIA by Peggy Parish
NATE THE GREAT by Marjorie Weinman Sharmat
BLACK LAGOON ADVENTURES by Mike Thaler
ARTHUR by Marc Brown
HENRY AND MUDGE by Cynthia Rylant
MERCY WATSON by Kate DiCamillo
MAGIC TREE HOUSE by Mary Pope Osborne
FLAT STANLEY by Jeff Brown

May our Good Lord continue to bless you and your family with His abundant graces! See you in August!

With prayers in Christ,


A handwritten signature in black ink, appearing to read 'Catherine Nguyen', with a long horizontal flourish extending to the right.

Ms. Catherine Nguyen,
Second Grade Teacher

MY READING LOG

Author: _____

Title: _____



STAR RATING



MONDAY

PAGES: _____ MINS: _____

☐ FICTION

☐ NONFICTION

TUESDAY

STAR RATING

PAGES: _____ MINS: _____


☐ FICTION

☐ NONFICTION



Title: _____

Author: _____



WEDNESDAY

STAR RATING



PAGES: _____ MINS: _____

☐ FICTION

☐ NONFICTION

THURSDAY

STAR RATING

PAGES: _____ MINS: _____


☐ FICTION

☐ NONFICTION




Title: _____

Author: _____



Author: _____

Title: _____



STAR RATING



FRIDAY

PAGES: _____ MINS: _____


☐ FICTION

☐ NONFICTION

MY READING LOG

Author: _____

Title: _____



STAR RATING



MONDAY

PAGES: _____ MINS: _____

☐ FICTION

☐ NONFICTION

TUESDAY

STAR RATING

PAGES: _____ MINS: _____


☐ FICTION

☐ NONFICTION



Title: _____

Author: _____



WEDNESDAY

STAR RATING



PAGES: _____ MINS: _____

☐ FICTION

☐ NONFICTION

THURSDAY

STAR RATING

PAGES: _____ MINS: _____


☐ FICTION

☐ NONFICTION




Title: _____

Author: _____



Author: _____

Title: _____



STAR RATING



FRIDAY

PAGES: _____ MINS: _____


☐ FICTION

☐ NONFICTION

MY READING LOG

Author: _____

Title: _____



STAR RATING



MONDAY

PAGES: _____ MINS: _____

☐ FICTION

☐ NONFICTION

TUESDAY

PAGES: _____ MINS: _____

☐ FICTION


☐ NONFICTION

STAR RATING



Title: _____

Author: _____



WEDNESDAY

STAR RATING



PAGES: _____ MINS: _____

☐ FICTION

☐ NONFICTION

THURSDAY

PAGES: _____ MINS: _____

☐ FICTION


☐ NONFICTION

STAR RATING




Title: _____

Author: _____



Author: _____

Title: _____



STAR RATING



FRIDAY

PAGES: _____ MINS: _____


☐ FICTION

☐ NONFICTION

MY READING LOG

Author: _____

Title: _____



STAR RATING



MONDAY

PAGES: _____ MINS: _____

☐ FICTION

☐ NONFICTION

TUESDAY

PAGES: _____ MINS: _____

☐ FICTION


☐ NONFICTION

STAR RATING



Title: _____

Author: _____



WEDNESDAY

STAR RATING



PAGES: _____ MINS: _____

☐ FICTION

☐ NONFICTION

THURSDAY

PAGES: _____ MINS: _____

☐ FICTION


☐ NONFICTION

STAR RATING



Title: _____

Author: _____



FRIDAY

STAR RATING




PAGES: _____ MINS: _____

☐ FICTION

☐ NONFICTION

Author: _____


Title: _____



MY READING LOG

Author: _____

Title: _____



STAR RATING



MONDAY

PAGES: _____ MINS: _____

☐ FICTION

☐ NONFICTION

TUESDAY

STAR RATING

PAGES: _____ MINS: _____


☐ FICTION

☐ NONFICTION



Title: _____

Author: _____



WEDNESDAY

STAR RATING



PAGES: _____ MINS: _____

☐ FICTION

☐ NONFICTION

THURSDAY

STAR RATING

PAGES: _____ MINS: _____


☐ FICTION

☐ NONFICTION




Title: _____

Author: _____



Author: _____

Title: _____



STAR RATING



FRIDAY

PAGES: _____ MINS: _____


☐ FICTION

☐ NONFICTION

MY READING LOG

Author: _____

Title: _____



STAR RATING



MONDAY

PAGES: _____ MINS: _____

☐ FICTION

☐ NONFICTION

TUESDAY

STAR RATING

PAGES: _____ MINS: _____


☐ FICTION

☐ NONFICTION



Title: _____

Author: _____



WEDNESDAY

STAR RATING



PAGES: _____ MINS: _____

☐ FICTION

☐ NONFICTION

THURSDAY

STAR RATING

PAGES: _____ MINS: _____


☐ FICTION

☐ NONFICTION




Title: _____

Author: _____



Author: _____

Title: _____



STAR RATING



FRIDAY

PAGES: _____ MINS: _____


☐ FICTION

☐ NONFICTION

MY READING LOG

Author: _____

Title: _____



STAR RATING



MONDAY

PAGES: _____ MINS: _____

☐ FICTION

☐ NONFICTION

TUESDAY

PAGES: _____ MINS: _____

☐ FICTION


☐ NONFICTION

STAR RATING



Title: _____

Author: _____



WEDNESDAY

STAR RATING



PAGES: _____ MINS: _____

☐ FICTION

☐ NONFICTION

THURSDAY

PAGES: _____ MINS: _____

☐ FICTION


☐ NONFICTION

STAR RATING




Title: _____

Author: _____



Author: _____

Title: _____



STAR RATING



FRIDAY

PAGES: _____ MINS: _____


☐ FICTION

☐ NONFICTION

MY READING LOG

Author: _____

Title: _____



STAR RATING



PAGES: _____ MINS: _____

MONDAY

☐ FICTION

☐ NONFICTION

TUESDAY

STAR RATING

PAGES: _____ MINS: _____


☐ FICTION

☐ NONFICTION



Title: _____

Author: _____



WEDNESDAY

STAR RATING



PAGES: _____ MINS: _____

☐ FICTION

☐ NONFICTION

THURSDAY

STAR RATING

PAGES: _____ MINS: _____


☐ FICTION

☐ NONFICTION



Title: _____

Author: _____



FRIDAY

STAR RATING




PAGES: _____ MINS: _____

☐ FICTION

☐ NONFICTION

Author: _____


Title: _____



MY READING LOG

Author: _____

Title: _____



STAR RATING



MONDAY

PAGES: _____ MINS: _____

☐ FICTION

☐ NONFICTION

TUESDAY

PAGES: _____ MINS: _____

☐ FICTION


☐ NONFICTION

STAR RATING



Title: _____

Author: _____



WEDNESDAY

STAR RATING



PAGES: _____ MINS: _____

☐ FICTION

☐ NONFICTION

THURSDAY

PAGES: _____ MINS: _____

☐ FICTION


☐ NONFICTION

STAR RATING



Title: _____

Author: _____



FRIDAY

STAR RATING




PAGES: _____ MINS: _____

☐ FICTION

☐ NONFICTION

Author: _____


Title: _____



MY READING LOG

Author: _____

Title: _____



STAR RATING



MONDAY

PAGES: _____ MINS: _____

☐ FICTION

☐ NONFICTION

TUESDAY

STAR RATING

PAGES: _____ MINS: _____


☐ FICTION

☐ NONFICTION



Title: _____

Author: _____



WEDNESDAY

STAR RATING



PAGES: _____ MINS: _____

☐ FICTION

☐ NONFICTION

THURSDAY

STAR RATING

PAGES: _____ MINS: _____


☐ FICTION

☐ NONFICTION




Title: _____

Author: _____



Author: _____

Title: _____



STAR RATING



FRIDAY

PAGES: _____ MINS: _____


☐ FICTION

☐ NONFICTION

MY READING LOG

Author: _____

Title: _____



STAR RATING



MONDAY

PAGES: _____ MINS: _____

☐ FICTION

☐ NONFICTION


TUESDAY

STAR RATING

PAGES: _____ MINS: _____


☐ FICTION

☐ NONFICTION



Title: _____

Author: _____



WEDNESDAY

STAR RATING



PAGES: _____ MINS: _____

☐ FICTION

☐ NONFICTION

THURSDAY

STAR RATING

PAGES: _____ MINS: _____


☐ FICTION

☐ NONFICTION




Title: _____

Author: _____



Author: _____

Title: _____



STAR RATING



FRIDAY

PAGES: _____ MINS: _____

☐ FICTION

☐ NONFICTION

Name: _____

Book Report—Fiction

Title of Book: _____

Author: _____

Remember to answer the questions in complete sentences.

Who are the characters in the story?

What is the setting of the story?

Write four complete sentences (a summary) telling about the story.

My favorite part of the story was when

Name: _____

Book Report—Nonfiction

Title of Book: _____

Author: _____

Three facts I learned while I was reading:

1.

2.

3.

Two questions that I have for the author:

1.

2.

One thing that I thought was the most interesting:

1.



grade

2

SUMMER

REVIEW


POWER PACK

Student pages

name:

Directions:

When you complete a page in the summer review pack, have an adult check your answers. Then color in the matching page number below. If you complete the summer review packet, return it to your 2nd grade teacher at the beginning of the school year for a **Special Treat!**



The Best thing about summer is...

1
writing

The best thing about summer is _____

Draw a picture to match your writing.

Fast math • subtraction

2
math

Solve these SUBTRACTION problems as fast as you can.

$\begin{array}{r} 9 \\ -6 \\ \hline \end{array}$	$\begin{array}{r} 8 \\ -4 \\ \hline \end{array}$	$\begin{array}{r} 9 \\ -7 \\ \hline \end{array}$	$\begin{array}{r} 10 \\ -4 \\ \hline \end{array}$	$\begin{array}{r} 7 \\ -4 \\ \hline \end{array}$	$\begin{array}{r} 8 \\ -6 \\ \hline \end{array}$	$\begin{array}{r} 5 \\ -3 \\ \hline \end{array}$	$\begin{array}{r} 8 \\ -6 \\ \hline \end{array}$
--	--	--	---	--	--	--	--

$\begin{array}{r} 9 \\ -7 \\ \hline \end{array}$	$\begin{array}{r} 8 \\ -5 \\ \hline \end{array}$	$\begin{array}{r} 7 \\ -4 \\ \hline \end{array}$	$\begin{array}{r} 5 \\ -4 \\ \hline \end{array}$	$\begin{array}{r} 6 \\ -3 \\ \hline \end{array}$	$\begin{array}{r} 6 \\ -2 \\ \hline \end{array}$	$\begin{array}{r} 8 \\ -6 \\ \hline \end{array}$	$\begin{array}{r} 4 \\ -3 \\ \hline \end{array}$
--	--	--	--	--	--	--	--

$\begin{array}{r} 8 \\ -7 \\ \hline \end{array}$	$\begin{array}{r} 9 \\ -7 \\ \hline \end{array}$	$\begin{array}{r} 10 \\ -8 \\ \hline \end{array}$	$\begin{array}{r} 7 \\ -5 \\ \hline \end{array}$	$\begin{array}{r} 7 \\ -7 \\ \hline \end{array}$	$\begin{array}{r} 8 \\ -6 \\ \hline \end{array}$	$\begin{array}{r} 8 \\ -7 \\ \hline \end{array}$	$\begin{array}{r} 9 \\ -7 \\ \hline \end{array}$
--	--	---	--	--	--	--	--

$\begin{array}{r} 6 \\ -5 \\ \hline \end{array}$	$\begin{array}{r} 6 \\ -6 \\ \hline \end{array}$	$\begin{array}{r} 9 \\ -7 \\ \hline \end{array}$	$\begin{array}{r} 6 \\ -2 \\ \hline \end{array}$	$\begin{array}{r} 9 \\ -1 \\ \hline \end{array}$	$\begin{array}{r} 7 \\ -6 \\ \hline \end{array}$	$\begin{array}{r} 5 \\ -3 \\ \hline \end{array}$	$\begin{array}{r} 7 \\ -2 \\ \hline \end{array}$
--	--	--	--	--	--	--	--

$\begin{array}{r} 8 \\ -1 \\ \hline \end{array}$	$\begin{array}{r} 9 \\ -7 \\ \hline \end{array}$	$\begin{array}{r} 6 \\ -4 \\ \hline \end{array}$	$\begin{array}{r} 9 \\ -8 \\ \hline \end{array}$	$\begin{array}{r} 10 \\ -9 \\ \hline \end{array}$	$\begin{array}{r} 8 \\ -7 \\ \hline \end{array}$	$\begin{array}{r} 6 \\ -3 \\ \hline \end{array}$	$\begin{array}{r} 5 \\ -3 \\ \hline \end{array}$
--	--	--	--	---	--	--	--

Context Clues

3
Reading

The following stories have make-believe words. Use the clues in the sentence to figure out the meaning of the make-believe word.

Last summer I went to the beach with my grandma. She loves to look for sнарples hidden in the sand. Her favorite kind of sнарples are the ones that have no broken pieces. The coolest sнарples I found still had a small crab living inside. I left that sнарple on the beach instead of putting it in my collection.

What do you think sнарples are?

What words help you figure out the meaning of the word sнарples?

It was the hottest day of the summer so Lucy and Susie decided to sell some refreshing blarling on the street outside their house. Susie picked fresh fruit from a tree in her yard and Lucy was in charge of getting ice from her house. The blarling was a little sour, so they had to add some sugar.

What do you think blarling is?

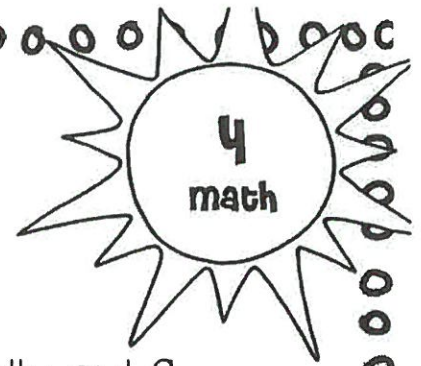
What words help you figure out the meaning of the word blarling?

"Don't forget to put some clinket on before you go outside" said Claudio's mother. Claudio did not like to wear clinket because the lotion sometimes gets in his eyes and stings. But, clinket is important so that you do not get a sunburn so he rubs it all over his skin. Claudio had a painful sunburn last summer so now he has learned his lesson and wears clinket whenever he is playing in the sun.

What do you think clinket are?

What words help you figure out the meaning of the word clinket?

problem solving



Lucy put 6 towers on the sandcastle. Molly put 9 towers on the sandcastle. How many more towers did Molly put than Lucy?

Number Sentence	Answer

Clara has 19 water balloons. She gives 7 away to her friends. How many does she have left?

Number Sentence	Answer

Billy picked 17 strawberries. He ate 9 of the strawberries and gave the rest to his brother. How many did he give to his brother?

Number Sentence	Answer

sentence or fragment?

5
grammar

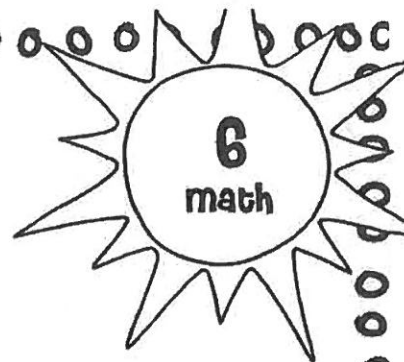
Circle the COMPLETE sentences.

Cross out the incomplete sentence FRAGMENTS.

HINT: There are FIVE complete sentences and SEVEN fragments.

The kitten is playing.	At the swimming pool.	On the white porch.
Kyle turned off the TV.	Do you like waterslides?	Drippy ice cream.
Fran's favorite shoes.	Fran's shoes are on the porch.	The huge red beach ball.
Do you have shorts?	Outside by the big barn.	Laughing and playing at the beach.

Place value



draw base ten
blocks to show

18

draw base ten
blocks to show

40


noun search!

7
grammar

Choose a book and find 14 different nouns (person, place, thing, or animal). Write the nouns in the space below.

Book Title:

Author:



1. _____

2. _____

3. _____

4. _____

5. _____

6. _____

7. _____

8. _____

9. _____

10. _____


11. _____

12. _____

13. _____

14. _____

PLACE VALUE REVIEW



what is the mystery number?

52 25 15 35

The number is greater than 20.

It is less than 40.

There is a 2 in the tens place.

The mystery number is: _____

what is the mystery number?

48 52 67 54

The number is less than 60

The number is greater than 50

The number has a 4 in the ones place

The mystery number is: _____

proper nouns

9
grammar

Read the words in each box.

Circle the word or phrase in each box that is a proper noun and needs a capital letter.

Hint: Names of people, months, and days of the week are all proper nouns

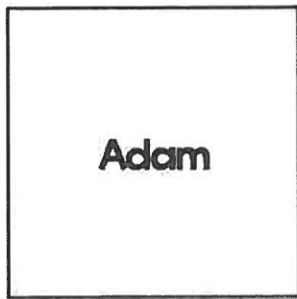
sam doll car	map monday marbles	beach august sand
susie surfboard saltwater	june waterpark slide	lemonade driving friday
chipmunk simon singing	sunday water ice cube	miss swanson teacher vacation

Write a sentence that includes two proper nouns:

partitioning shapes


10
math

Adam and Lisa each made a sandwich. They both cut their sandwich in a different way from each other. Both sandwiches were cut into four equal shares. How could they have cut them?



Adam

If he eats one quarter of this sandwich, how much will he have left?

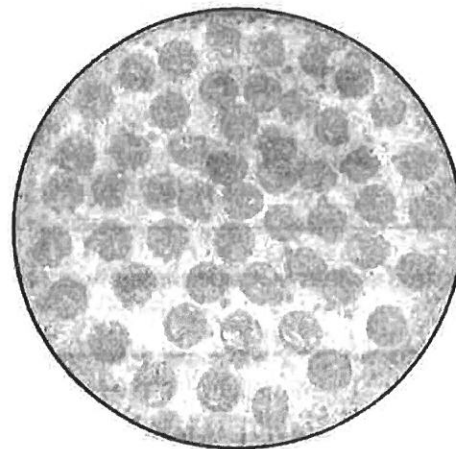


Lisa

If she ate four shares of this sandwich, how much will she have left?

Draw lines to cut the pizza into four equal shares.

Color in one-fourth of the pizza.



BOOK RESPONSE:

Ask Questions



11
Reading

Read a fiction book at your reading level. As you read,
write down the questions you notice yourself asking.

Book Title: _____

who?

what?

why?

how?

where?

Fast math • Addition

12
math

Solve these ADDITION problems as fast as you can.

$$\begin{array}{r} 2 \\ + 6 \\ \hline \end{array}$$

$$\begin{array}{r} 5 \\ + 3 \\ \hline \end{array}$$

$$\begin{array}{r} 2 \\ + 12 \\ \hline \end{array}$$

$$\begin{array}{r} 3 \\ + 7 \\ \hline \end{array}$$

$$\begin{array}{r} 2 \\ + 7 \\ \hline \end{array}$$

$$\begin{array}{r} 13 \\ + 2 \\ \hline \end{array}$$

$$\begin{array}{r} 4 \\ + 8 \\ \hline \end{array}$$

$$\begin{array}{r} 2 \\ + 16 \\ \hline \end{array}$$

$$\begin{array}{r} 4 \\ + 9 \\ \hline \end{array}$$

$$\begin{array}{r} 8 \\ + 5 \\ \hline \end{array}$$

$$\begin{array}{r} 5 \\ + 5 \\ \hline \end{array}$$

$$\begin{array}{r} 12 \\ + 4 \\ \hline \end{array}$$

$$\begin{array}{r} 15 \\ + 2 \\ \hline \end{array}$$

$$\begin{array}{r} 4 \\ + 8 \\ \hline \end{array}$$

$$\begin{array}{r} 13 \\ + 4 \\ \hline \end{array}$$

$$\begin{array}{r} 16 \\ + 3 \\ \hline \end{array}$$

$$\begin{array}{r} 5 \\ + 9 \\ \hline \end{array}$$

$$\begin{array}{r} 13 \\ + 6 \\ \hline \end{array}$$

$$\begin{array}{r} 7 \\ + 5 \\ \hline \end{array}$$

$$\begin{array}{r} 13 \\ + 6 \\ \hline \end{array}$$

$$\begin{array}{r} 12 \\ + 7 \\ \hline \end{array}$$

$$\begin{array}{r} 6 \\ + 4 \\ \hline \end{array}$$

$$\begin{array}{r} 9 \\ + 7 \\ \hline \end{array}$$

$$\begin{array}{r} 6 \\ + 6 \\ \hline \end{array}$$

$$\begin{array}{r} 8 \\ + 5 \\ \hline \end{array}$$

$$\begin{array}{r} 12 \\ + 8 \\ \hline \end{array}$$

$$\begin{array}{r} 7 \\ + 8 \\ \hline \end{array}$$

$$\begin{array}{r} 9 \\ + 10 \\ \hline \end{array}$$

$$\begin{array}{r} 9 \\ + 7 \\ \hline \end{array}$$

$$\begin{array}{r} 9 \\ + 8 \\ \hline \end{array}$$

$$\begin{array}{r} 9 \\ + 6 \\ \hline \end{array}$$

$$\begin{array}{r} 8 \\ + 8 \\ \hline \end{array}$$

$$\begin{array}{r} 7 \\ + 9 \\ \hline \end{array}$$

$$\begin{array}{r} 6 \\ + 12 \\ \hline \end{array}$$

$$\begin{array}{r} 10 \\ + 6 \\ \hline \end{array}$$

$$\begin{array}{r} 7 \\ + 9 \\ \hline \end{array}$$

$$\begin{array}{r} 10 \\ + 6 \\ \hline \end{array}$$

$$\begin{array}{r} 11 \\ + 4 \\ \hline \end{array}$$

$$\begin{array}{r} 12 \\ + 5 \\ \hline \end{array}$$

$$\begin{array}{r} 7 \\ + 9 \\ \hline \end{array}$$

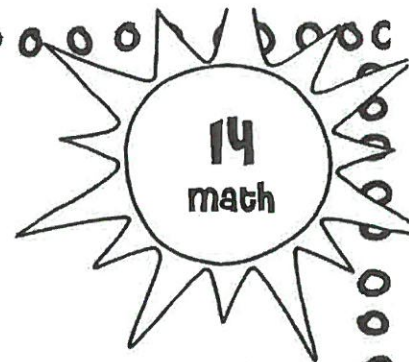
perfect summer day...

Write about the perfect summer day from morning until night.
Include at least four sentences.

13
writing

Draw a picture to match your writing.

problem solving



Luke threw 14 water balloons at his older brother. 7 of his water balloons missed his brother. The rest hit him. How many water balloons hit his brother?

Number Sentence	Answer


Ten kids can be in the swimming class at one time. 13 kids want to be in the swimming class. How many kids will not be able to join the swimming class?

Number Sentence	Answer

The ice cube tray holds 18 ice cubes. Melissa used 9 ice cubes and left the rest in the ice cube tray. How many ice cubes did she leave in the tray?

Number Sentence	Answer

Addition



<p>Add:</p> $\begin{array}{r} 34 \\ + 5 \\ \hline \end{array}$	<p>Show how to solve this using base ten block drawings:</p>	<p>Answer:</p>
---	--	----------------

<p>Add:</p> $\begin{array}{r} 22 \\ + 30 \\ \hline \end{array}$	<p>Show how to solve this using base ten block drawings:</p>	<p>Answer:</p>
--	--	----------------

Choose one of the problems above and write a subtraction sentence that matches:

_____ - _____ = _____

prefixes and suffixes

16
grammar

Compare the two words. How did the meaning of the word change when the prefix or suffix was added?

agree	disagree	How did adding "DIS" change the meaning of the word?
build	rebuild	How did adding "RE" change the meaning of the word?
walk	walked	How did adding "ED" change the meaning of the word?
class	classes	How did adding "ES" change the meaning of the word?

Fast math • Addition

17
math

Solve these ADDITION problems as fast as you can.

$$\begin{array}{r} 4 \\ + 9 \\ \hline \end{array}$$

$$\begin{array}{r} 4 \\ + 8 \\ \hline \end{array}$$

$$\begin{array}{r} 5 \\ + 12 \\ \hline \end{array}$$

$$\begin{array}{r} 6 \\ + 7 \\ \hline \end{array}$$

$$\begin{array}{r} 7 \\ + 3 \\ \hline \end{array}$$

$$\begin{array}{r} 12 \\ + 4 \\ \hline \end{array}$$

$$\begin{array}{r} 2 \\ + 9 \\ \hline \end{array}$$

$$\begin{array}{r} 4 \\ + 14 \\ \hline \end{array}$$

$$\begin{array}{r} 2 \\ + 8 \\ \hline \end{array}$$

$$\begin{array}{r} 13 \\ + 4 \\ \hline \end{array}$$

$$\begin{array}{r} 9 \\ + 7 \\ \hline \end{array}$$

$$\begin{array}{r} 11 \\ + 5 \\ \hline \end{array}$$

$$\begin{array}{r} 14 \\ + 3 \\ \hline \end{array}$$

$$\begin{array}{r} 3 \\ + 9 \\ \hline \end{array}$$

$$\begin{array}{r} 13 \\ + 5 \\ \hline \end{array}$$

$$\begin{array}{r} 12 \\ + 6 \\ \hline \end{array}$$

$$\begin{array}{r} 5 \\ + 9 \\ \hline \end{array}$$

$$\begin{array}{r} 15 \\ + 3 \\ \hline \end{array}$$

$$\begin{array}{r} 11 \\ + 5 \\ \hline \end{array}$$

$$\begin{array}{r} 11 \\ + 4 \\ \hline \end{array}$$

$$\begin{array}{r} 13 \\ + 6 \\ \hline \end{array}$$

$$\begin{array}{r} 7 \\ + 4 \\ \hline \end{array}$$

$$\begin{array}{r} 12 \\ + 6 \\ \hline \end{array}$$

$$\begin{array}{r} 7 \\ + 8 \\ \hline \end{array}$$

$$\begin{array}{r} 12 \\ + 4 \\ \hline \end{array}$$

$$\begin{array}{r} 13 \\ + 4 \\ \hline \end{array}$$

$$\begin{array}{r} 7 \\ + 9 \\ \hline \end{array}$$

$$\begin{array}{r} 8 \\ + 9 \\ \hline \end{array}$$

$$\begin{array}{r} 11 \\ + 8 \\ \hline \end{array}$$

$$\begin{array}{r} 8 \\ + 8 \\ \hline \end{array}$$

$$\begin{array}{r} 9 \\ + 7 \\ \hline \end{array}$$

$$\begin{array}{r} 6 \\ + 8 \\ \hline \end{array}$$

$$\begin{array}{r} 7 \\ + 12 \\ \hline \end{array}$$

$$\begin{array}{r} 6 \\ + 8 \\ \hline \end{array}$$

$$\begin{array}{r} 10 \\ + 5 \\ \hline \end{array}$$

$$\begin{array}{r} 5 \\ + 8 \\ \hline \end{array}$$

$$\begin{array}{r} 11 \\ + 8 \\ \hline \end{array}$$

$$\begin{array}{r} 6 \\ + 4 \\ \hline \end{array}$$

$$\begin{array}{r} 11 \\ + 4 \\ \hline \end{array}$$

$$\begin{array}{r} 5 \\ + 9 \\ \hline \end{array}$$

IF I COULD go anywhere...

18
writing

If I could go anywhere on summer vacation, I
would go to _____

because _____

Draw a picture to match your writing.

problem solving

19
math

Add.

$$\begin{array}{r} 28 \\ + 5 \\ \hline \end{array}$$

Write a matching
SUBTRACTION problem..

Add.

$$\begin{array}{r} 18 \\ + 10 \\ \hline \end{array}$$

Write a matching
SUBTRACTION problem..

Add.

$$\begin{array}{r} 29 \\ + 4 \\ \hline \end{array}$$

Write a matching
SUBTRACTION problem..

Subtract.

$$\begin{array}{r} 13 \\ - 6 \\ \hline \end{array}$$

Write a matching
ADDITION problem..

Subtract.

$$\begin{array}{r} 22 \\ - 10 \\ \hline \end{array}$$

Write a matching
ADDITION problem..

Subtract.

$$\begin{array}{r} 25 \\ - 6 \\ \hline \end{array}$$

Write a matching
ADDITION problem..

Root Words

20
grammar

All of the words below have a "root word". Write the root word.
For example, in uncomfortable - "comfort" is the root word.


rebuilding	
guessed	
remixing	
dishes	
walking	
jumped	
prereading	

Take a look at these "root words". How many new words can you "grow" from each root word.

For example, from **love** you can grow **lovely**, **loving** and **loved**.

watch	
play	
glass	
box	

Place value



draw base ten
blocks to show

17

draw base ten
blocks to show

70


verb search!

22
grammar

Choose a book and find 14 different verbs (action words). Write the verbs in the space below.


Book Title:

Author:



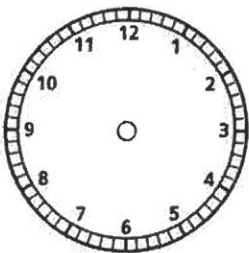
1. _____
2. _____
3. _____
4. _____
5. _____
6. _____
7. _____
8. _____
9. _____
10. _____
11. _____
12. _____
13. _____
14. _____

Telling Time

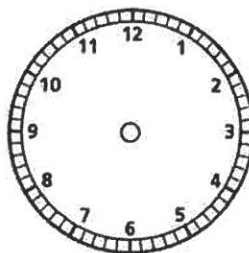


Show the time on the clocks.

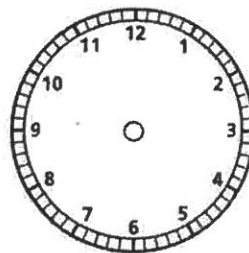
4:00



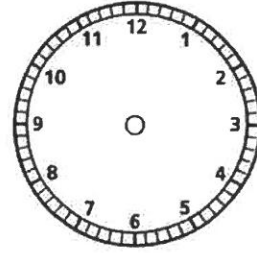
7:30



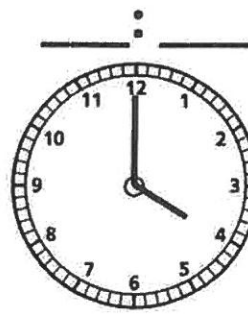

1:00



9:30



Write the time on the lines below.



proper nouns

24
grammar

Read the words in each box.

Circle the word or phrase in each box that is a proper noun and needs a capital letter.

Hint: Names of people, months, and days of the week are all proper nouns

monday money monkey	soda sara songs	diner december days
fins face friday	maria markers math	ape adam airplane
camping carol car	thursday things table	school socks september

Write a sentence that includes two proper nouns:

Fast math • subtraction

25
math

Solve these SUBTRACTION problems as fast as you can.

$$\begin{array}{r} 8 \\ -6 \\ \hline \end{array} \quad \begin{array}{r} 6 \\ -4 \\ \hline \end{array} \quad \begin{array}{r} 8 \\ -3 \\ \hline \end{array} \quad \begin{array}{r} 9 \\ -7 \\ \hline \end{array} \quad \begin{array}{r} 8 \\ -4 \\ \hline \end{array} \quad \begin{array}{r} 7 \\ -2 \\ \hline \end{array} \quad \begin{array}{r} 5 \\ -3 \\ \hline \end{array} \quad \begin{array}{r} 3 \\ -2 \\ \hline \end{array}$$

$$\begin{array}{r} 7 \\ -4 \\ \hline \end{array} \quad \begin{array}{r} 8 \\ -3 \\ \hline \end{array} \quad \begin{array}{r} 8 \\ -4 \\ \hline \end{array} \quad \begin{array}{r} 6 \\ -4 \\ \hline \end{array} \quad \begin{array}{r} 7 \\ -3 \\ \hline \end{array} \quad \begin{array}{r} 8 \\ -6 \\ \hline \end{array} \quad \begin{array}{r} 7 \\ -4 \\ \hline \end{array} \quad \begin{array}{r} 9 \\ -3 \\ \hline \end{array}$$

$$\begin{array}{r} 7 \\ -6 \\ \hline \end{array} \quad \begin{array}{r} 9 \\ -7 \\ \hline \end{array} \quad \begin{array}{r} 7 \\ -6 \\ \hline \end{array} \quad \begin{array}{r} 5 \\ -5 \\ \hline \end{array} \quad \begin{array}{r} 9 \\ -8 \\ \hline \end{array} \quad \begin{array}{r} 9 \\ -6 \\ \hline \end{array} \quad \begin{array}{r} 6 \\ -4 \\ \hline \end{array} \quad \begin{array}{r} 7 \\ -7 \\ \hline \end{array}$$

$$\begin{array}{r} 9 \\ -8 \\ \hline \end{array} \quad \begin{array}{r} 7 \\ -5 \\ \hline \end{array} \quad \begin{array}{r} 10 \\ -7 \\ \hline \end{array} \quad \begin{array}{r} 9 \\ -8 \\ \hline \end{array} \quad \begin{array}{r} 9 \\ -6 \\ \hline \end{array} \quad \begin{array}{r} 10 \\ -6 \\ \hline \end{array} \quad \begin{array}{r} 7 \\ -7 \\ \hline \end{array} \quad \begin{array}{r} 10 \\ -6 \\ \hline \end{array}$$

$$\begin{array}{r} 9 \\ -9 \\ \hline \end{array} \quad \begin{array}{r} 8 \\ -7 \\ \hline \end{array} \quad \begin{array}{r} 10 \\ -9 \\ \hline \end{array} \quad \begin{array}{r} 7 \\ -4 \\ \hline \end{array} \quad \begin{array}{r} 10 \\ -9 \\ \hline \end{array} \quad \begin{array}{r} 6 \\ -3 \\ \hline \end{array} \quad \begin{array}{r} 10 \\ -9 \\ \hline \end{array} \quad \begin{array}{r} 9 \\ -8 \\ \hline \end{array}$$

BOOK RESPONSE:

Ask Questions

26
Reading

Read a fiction book at your reading. As you read, write down the questions you notice yourself asking.

Book Title: _____

Who?

What?

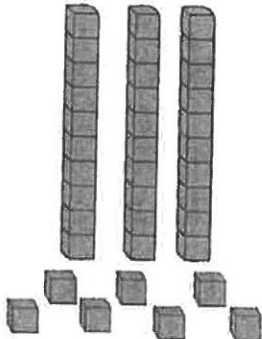
Why?

How?

Where?

Place Value Review

27
math

<p>I have this many blocks:</p> 	<p>How many tens:</p>	<p>How many ones:</p>	<p>How many blocks altogether:</p>
---	-----------------------	-----------------------	------------------------------------

<p>Draw this number in blocks:</p>	<p>How many tens:</p> <p>6</p>	<p>How many ones:</p> <p>4</p>	<p>How many blocks altogether:</p>
------------------------------------	--------------------------------	--------------------------------	------------------------------------

How many tens are in the number 53? _____

How many ones are in the number 75? _____

How many ones are in the number 80? _____

BOOK RESPONSE:

Structure (Fiction)

28
Reading

Read a fiction book at your reading level and respond to it below.

Book Title: _____

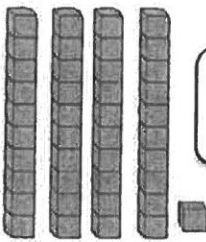

Describe the personality of the main character.

Describe the major events in the story.

Place Value Review

29
math

Write $>$ $<$ or $=$ to compare the numbers below

63 <input type="text"/> 36	3 tens <input type="text"/> 33
 <input type="text"/> 41	$20+4$ <input type="text"/> 42
5 tens and 2 ones <input type="text"/> 25	89 <input type="text"/> 98
42 <input type="text"/> 2 tens	$20+3$ <input type="text"/> 

BOOK RESPONSE:




Parts of a Story

30
Reading

Read a fiction book at your reading level and respond to it below.


Book Title: _____

THE CHARACERS:



Describe how this character acts or feels.

Place Value Review



<p>Add:</p> $\begin{array}{r} 24 \\ + 9 \\ \hline \end{array}$	<p>Show how to solve this using base ten block drawings:</p>	<p>Answer:</p>
---	--	----------------

<p>Add:</p> $\begin{array}{r} 62 \\ + 20 \\ \hline \end{array}$	<p>Show how to solve this using base ten block drawings:</p>	<p>Answer:</p>
--	--	----------------

Choose one of the problems above and write a subtraction sentence that matches:

_____ - _____ = _____

32
writing

This image shows a single page of white paper with horizontal black lines, resembling notebook paper. The lines are evenly spaced and run across the width of the page. There are no margins, text, or other markings on the paper.

Fast math • subtraction

33
math

Solve these SUBTRACTION problems as fast as you can.

$\begin{array}{r} 2 \\ - 2 \\ \hline \end{array}$	$\begin{array}{r} 4 \\ - 1 \\ \hline \end{array}$	$\begin{array}{r} 10 \\ - 1 \\ \hline \end{array}$	$\begin{array}{r} 10 \\ - 7 \\ \hline \end{array}$	$\begin{array}{r} 2 \\ - 1 \\ \hline \end{array}$	$\begin{array}{r} 4 \\ - 2 \\ \hline \end{array}$	$\begin{array}{r} 9 \\ - 2 \\ \hline \end{array}$	$\begin{array}{r} 8 \\ - 2 \\ \hline \end{array}$
---	---	--	--	---	---	---	---

$\begin{array}{r} 6 \\ - 4 \\ \hline \end{array}$	$\begin{array}{r} 4 \\ - 3 \\ \hline \end{array}$	$\begin{array}{r} 9 \\ - 3 \\ \hline \end{array}$	$\begin{array}{r} 8 \\ - 4 \\ \hline \end{array}$	$\begin{array}{r} 9 \\ - 3 \\ \hline \end{array}$	$\begin{array}{r} 8 \\ - 4 \\ \hline \end{array}$	$\begin{array}{r} 7 \\ - 4 \\ \hline \end{array}$	$\begin{array}{r} 7 \\ - 3 \\ \hline \end{array}$
---	---	---	---	---	---	---	---

$\begin{array}{r} 9 \\ - 5 \\ \hline \end{array}$	$\begin{array}{r} 9 \\ - 6 \\ \hline \end{array}$	$\begin{array}{r} 10 \\ - 6 \\ \hline \end{array}$	$\begin{array}{r} 8 \\ - 5 \\ \hline \end{array}$	$\begin{array}{r} 6 \\ - 5 \\ \hline \end{array}$	$\begin{array}{r} 9 \\ - 5 \\ \hline \end{array}$	$\begin{array}{r} 7 \\ - 4 \\ \hline \end{array}$	$\begin{array}{r} 7 \\ - 6 \\ \hline \end{array}$
---	---	--	---	---	---	---	---

$\begin{array}{r} 10 \\ - 8 \\ \hline \end{array}$	$\begin{array}{r} 8 \\ - 7 \\ \hline \end{array}$	$\begin{array}{r} 9 \\ - 7 \\ \hline \end{array}$	$\begin{array}{r} 9 \\ - 2 \\ \hline \end{array}$	$\begin{array}{r} 10 \\ - 8 \\ \hline \end{array}$	$\begin{array}{r} 10 \\ - 7 \\ \hline \end{array}$	$\begin{array}{r} 8 \\ - 7 \\ \hline \end{array}$	$\begin{array}{r} 9 \\ - 8 \\ \hline \end{array}$
--	---	---	---	--	--	---	---

$\begin{array}{r} 10 \\ - 9 \\ \hline \end{array}$	$\begin{array}{r} 9 \\ - 9 \\ \hline \end{array}$	$\begin{array}{r} 7 \\ - 3 \\ \hline \end{array}$	$\begin{array}{r} 10 \\ - 10 \\ \hline \end{array}$	$\begin{array}{r} 6 \\ - 2 \\ \hline \end{array}$	$\begin{array}{r} 9 \\ - 3 \\ \hline \end{array}$	$\begin{array}{r} 10 \\ - 9 \\ \hline \end{array}$	$\begin{array}{r} 8 \\ - 2 \\ \hline \end{array}$
--	---	---	---	---	---	--	---

sentence or fragment?

34

grammar

Circle the COMPLETE sentences.

Cross out the incomplete sentence FRAGMENTS.

HINT: There are FIVE complete sentences and SEVEN fragments.

Soft sand in the ocean.	They are swimming.	Sarah loves strawberries.
The seashell is white.	Very cold water in the pool.	Do you like popsicles?
Tennis balls on the table?	She runs in the race.	The biggest sandcastle.
Can we ride bikes?	Laying in the hot sun.	Do you like to play soccer?

problem solving

35
math

Add.

$$\begin{array}{r} 33 \\ + 5 \\ \hline \end{array}$$

Write a matching
SUBTRACTION problem..

Add.

$$\begin{array}{r} 24 \\ + 10 \\ \hline \end{array}$$

Write a matching
SUBTRACTION problem..

Add.

$$\begin{array}{r} 17 \\ + 4 \\ \hline \end{array}$$

Write a matching
SUBTRACTION problem..

Subtract.

$$\begin{array}{r} 18 \\ - 6 \\ \hline \end{array}$$

Write a matching
ADDITION problem..

Subtract.

$$\begin{array}{r} 34 \\ - 10 \\ \hline \end{array}$$

Write a matching
ADDITION problem..

Subtract.

$$\begin{array}{r} 18 \\ - 8 \\ \hline \end{array}$$

Write a matching
ADDITION problem..

Favorite season

36
writing

What is your favorite season? Fall, winter, spring, or summer?
Tell three reasons why this is your favorite season. Use complete sentences.

My favorite season is _____

Reason #1 _____

Reason #2 _____

Reason #3 _____

Problem solving

37
math

Michael squeezed 12 lemons for his glass of lemonade. Alyssa squeezed 8 lemons for her glass of lemonade. How many more lemons did Michael squeeze than Alyssa?

Number Sentence	Answer

Jennie rode 6 laps around the park on her bike. Miguel rode 5 laps around the park on his bike. How many laps did they ride altogether?

Number Sentence	Answer

There were 12 girls and 7 boys at the swimming pool. How many kids were at the swimming pool altogether?

Number Sentence	Answer

Adjective search!

38
grammar

Choose a book and find 14 different adjectives (describing words). Write the adjectives in the space below.

Book Title:

Author:

1. _____

2. _____

3. _____

4. _____

5. _____

6. _____

7. _____

8. _____

9. _____


10. _____

11. _____


12. _____

13. _____

14. _____

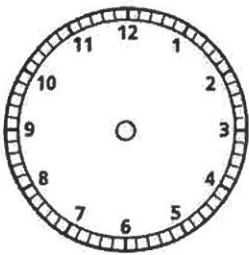


Telling Time

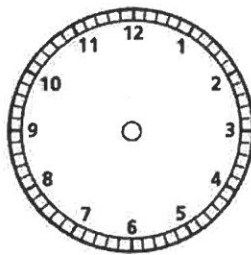


Show the time on the clocks.

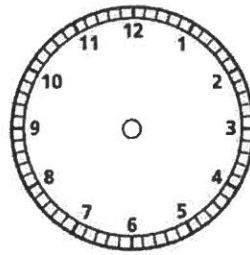
5:00



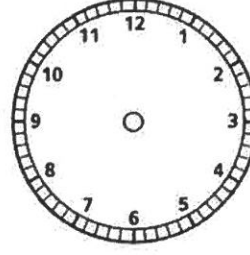
2:30



9:00




1:30




Write the time on the lines below.


____ : ____




____ : ____



____ : ____



____ : ____



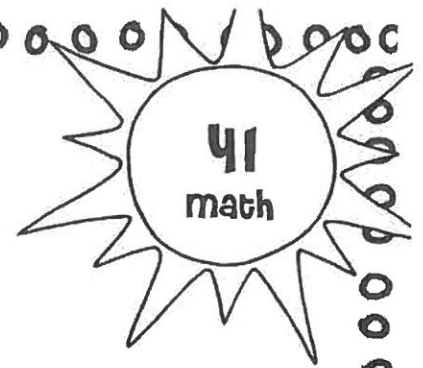
The best activity...

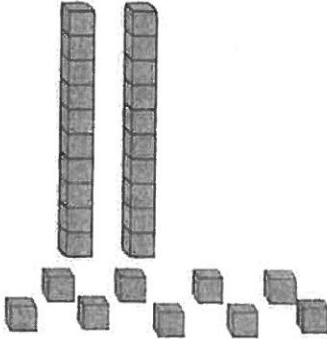
40
writing

The best activity on a hot day is _____

because _____

Place Value Review



I have this many blocks: 	How many tens:	How many ones:	How many blocks altogether:
---	----------------	----------------	-----------------------------

Draw this number in blocks:	How many tens: 2	How many ones: 3	How many blocks altogether:
-----------------------------	-------------------------	-------------------------	-----------------------------

How many tens are in the number 71? _____

How many ones are in the number 42? _____

How many ones are in the number 65? _____

Alike and Different

42
grammar

Explain how the meaning of the two words are similar and different. Use complete sentences..

dog cat

These
two
things
are
similar
because..

table chair

These
two
things
are
similar
because..

towel blanket

These
two
things
are
similar
because..


flower tree

These
two
things
are
similar
because..

partitioning shapes


43
math

Draw a line to cut the square into two equal shares.




Color in half of the entire square.

Draw lines to cut the square into four equal shares.




Color in one fourth of the entire square.

Draw a line to cut the circle into two equal shares.




Color in two shares of the circle.


Draw lines to cut the circle into four equal shares.



Color in one quarter of the circle.



How much of the square is colored in?



Is this circle divided into equal shares? _____

If it is, how many equal shares

setting of the story

44
Reading

Read a fiction story and describe the setting of the story.

The **SETTING** means the time and place where the story happens. The words and the pictures help you see the setting.

The setting of the story was: _____

The words or pictures from the book that helped me identify the setting were: _____

Fast math • Addition

45
math

Solve these ADDITION problems as fast as you can.

$$\begin{array}{r} 1 \\ + 9 \\ \hline \end{array}$$

$$\begin{array}{r} 4 \\ + 1 \\ \hline \end{array}$$

$$\begin{array}{r} 2 \\ + 16 \\ \hline \end{array}$$

$$\begin{array}{r} 1 \\ + 7 \\ \hline \end{array}$$

$$\begin{array}{r} 2 \\ + 9 \\ \hline \end{array}$$

$$\begin{array}{r} 14 \\ + 2 \\ \hline \end{array}$$

$$\begin{array}{r} 1 \\ + 8 \\ \hline \end{array}$$

$$\begin{array}{r} 2 \\ + 15 \\ \hline \end{array}$$

$$\begin{array}{r} 3 \\ + 9 \\ \hline \end{array}$$

$$\begin{array}{r} 8 \\ + 4 \\ \hline \end{array}$$

$$\begin{array}{r} 3 \\ + 5 \\ \hline \end{array}$$

$$\begin{array}{r} 12 \\ + 4 \\ \hline \end{array}$$

$$\begin{array}{r} 13 \\ + 2 \\ \hline \end{array}$$

$$\begin{array}{r} 4 \\ + 9 \\ \hline \end{array}$$

$$\begin{array}{r} 11 \\ + 4 \\ \hline \end{array}$$

$$\begin{array}{r} 15 \\ + 3 \\ \hline \end{array}$$

$$\begin{array}{r} 4 \\ + 9 \\ \hline \end{array}$$

$$\begin{array}{r} 13 \\ + 4 \\ \hline \end{array}$$

$$\begin{array}{r} 8 \\ + 5 \\ \hline \end{array}$$

$$\begin{array}{r} 11 \\ + 6 \\ \hline \end{array}$$

$$\begin{array}{r} 12 \\ + 5 \\ \hline \end{array}$$

$$\begin{array}{r} 8 \\ + 4 \\ \hline \end{array}$$

$$\begin{array}{r} 10 \\ + 5 \\ \hline \end{array}$$

$$\begin{array}{r} 6 \\ + 5 \\ \hline \end{array}$$

$$\begin{array}{r} 8 \\ + 4 \\ \hline \end{array}$$

$$\begin{array}{r} 11 \\ + 8 \\ \hline \end{array}$$

$$\begin{array}{r} 7 \\ + 9 \\ \hline \end{array}$$

$$\begin{array}{r} 8 \\ + 10 \\ \hline \end{array}$$

$$\begin{array}{r} 9 \\ + 8 \\ \hline \end{array}$$

$$\begin{array}{r} 8 \\ + 8 \\ \hline \end{array}$$

$$\begin{array}{r} 9 \\ + 11 \\ \hline \end{array}$$

$$\begin{array}{r} 7 \\ + 8 \\ \hline \end{array}$$

$$\begin{array}{r} 8 \\ + 9 \\ \hline \end{array}$$

$$\begin{array}{r} 6 \\ + 9 \\ \hline \end{array}$$

$$\begin{array}{r} 10 \\ + 9 \\ \hline \end{array}$$

$$\begin{array}{r} 5 \\ + 9 \\ \hline \end{array}$$

$$\begin{array}{r} 10 \\ + 8 \\ \hline \end{array}$$

$$\begin{array}{r} 9 \\ + 4 \\ \hline \end{array}$$

$$\begin{array}{r} 12 \\ + 7 \\ \hline \end{array}$$

$$\begin{array}{r} 3 \\ + 9 \\ \hline \end{array}$$

Past Tense

46
writing

Complete the sentences.

Yesterday...

Right now...

Tomorrow...

Fill in the word or words to make the sentence make sense. If you get stuck, the CLUE WORDS may help you but they may need to be changed to work in the sentence.

Clue Words

play walk cook think talk eat will

Yesterday I _____ home. When I got there, I
_____ my DS for two hours! Then my mom
_____ dinner and we all sat down and
_____ about our day. Today I am very tired. Right
now I want to _____ my DS again because I have a
new game. My mind keeps _____ about the game.
When I go home after school, I _____ my
game if my mom lets me. Also, I _____ dinner.

Adding and subtracting ten

47
math

Continue the patterns below:

22		42			72	
----	--	----	--	--	----	--

	37	47				
--	----	----	--	--	--	--

86	76			46		
----	----	--	--	----	--	--

81		61	51			
----	--	----	----	--	--	--

Solve the problems mentally.

Try to find the answer in your mind without counting on your fingers or using pictures

$32 + 10 =$	$58 + 10 =$	$21 + 10 =$
$40 + 10 =$	$87 + 10 =$	$36 + 10 =$
$65 - 10 =$	$43 - 10 =$	$78 - 10 =$
$81 - 10 =$	$98 - 10 =$	$23 - 10 =$

Alike and Different

48
vocab

The words in the word box below have been sorted into four different categories.

Word Box			
grass	green	soil	water
flower	daisy	seed	weed
stem	leaf	petal	

<u>Types of Plants</u>	<u>Plants Need</u>
flower	water
daisy	soil
weed	
grass	

<u>Parts of a Plant</u>	<u>Other</u>
stem	green
leaf	
petal	
seed	

Now it is your turn. Figure out a way to sort the following words into categories

Word Box	
airplane	bus
car	walking
helicopter	scooter
taxi	motorcycle
truck	train
hot air balloon	

<u>Category Name:</u>	<u>Category Name:</u>
<u>Category Name:</u>	<u>Category Name:</u>

Problem solving

49
math

There are 4 blue kites, 3 red kites, and 5 yellow kites flying at the beach. How many kites are there altogether?

Number Sentence	Answer

Andre and his parents built a sandcastle. Andre made 5 towers. His dad made 6 towers. His mom made 7 towers. How many towers are on the sandcastle?

Number Sentence	Answer

The Thompson kids sold lemonade in their neighborhood. They sold 6 pitchers of plain lemonade, 2 pitchers of strawberry lemonade, and 5 pitchers of raspberry lemonade. How many pitchers of lemonade did they sell in all?

Number Sentence	Answer

character personality

50
Reading

Read a fiction story and describe the main character of the story

Book Title: _____

Main Character's Name: _____

Main Character's Personality Traits (How can you describe their personality?): _____

I know the character has these traits because the **TEXT** says:

I know the character has these traits because the **PICTURES** show:
